
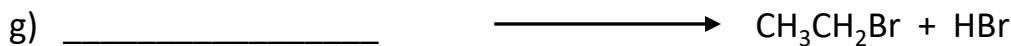
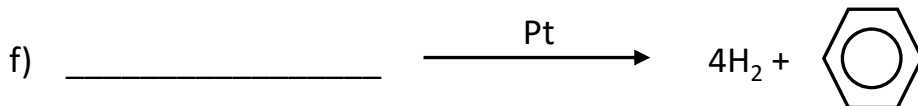
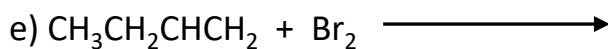
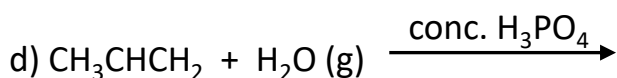
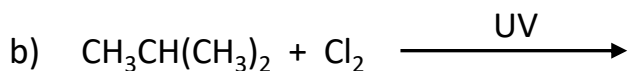
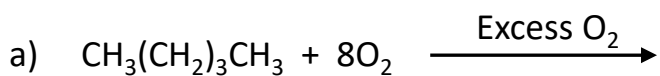



| | | |
|----|----|---|
| As | K |  |
| Fr | A | N |
| C | He | M |

Complete and balance the following chemical equations



| | | |
|----|----|---|
| As | K |  |
| Fr | A | N |
| C | He | M |

