
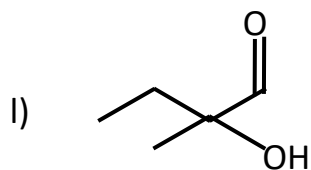
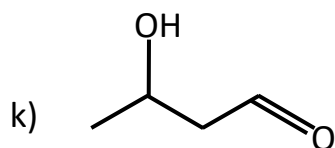
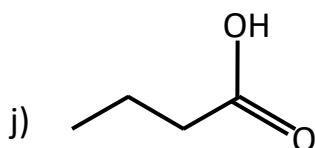
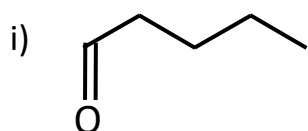
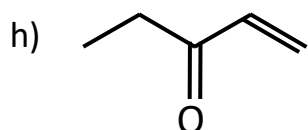
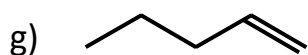
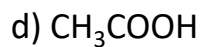
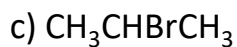
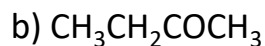




As	K	
Fr	A	N
C	He	M

Q1 Identify the functional groups in each of the molecules below. The first example has been made for you



As	K	
Fr	A	N
C	He	M

